









# Single-Digit Addition

Solve each addition problem and write your answer in the box.

<div style="border: 1px dashed black; padding: 10px; display: inline-block;">  </div> <div style="display: inline-block; vertical-align: middle; text-align: center;"> <div style="border: 1px solid black; border-radius: 50%; width: 40px; height: 40px; line-height: 40px; text-align: center; margin: 0 auto;">2</div> </div>	+	<div style="border: 1px dashed black; padding: 10px; display: inline-block;">  </div> <div style="display: inline-block; vertical-align: middle; text-align: center;"> <div style="border: 1px solid black; border-radius: 50%; width: 40px; height: 40px; line-height: 40px; text-align: center; margin: 0 auto;">3</div> </div>	=	
---	---	---	---	--

<div style="border: 1px dashed black; padding: 10px; display: inline-block;">  </div> <div style="display: inline-block; vertical-align: middle; text-align: center;"> <div style="border: 1px solid black; border-radius: 50%; width: 40px; height: 40px; line-height: 40px; text-align: center; margin: 0 auto;">3</div> </div>	+	<div style="border: 1px dashed black; padding: 10px; display: inline-block;">  </div> <div style="display: inline-block; vertical-align: middle; text-align: center;"> <div style="border: 1px solid black; border-radius: 50%; width: 40px; height: 40px; line-height: 40px; text-align: center; margin: 0 auto;">3</div> </div>	=	
--	---	--	---	--

<div style="border: 1px dashed black; padding: 10px; display: inline-block;">  </div> <div style="display: inline-block; vertical-align: middle; text-align: center;"> <div style="border: 1px solid black; border-radius: 50%; width: 40px; height: 40px; line-height: 40px; text-align: center; margin: 0 auto;">1</div> </div>	+	<div style="border: 1px dashed black; padding: 10px; display: inline-block;">  </div> <div style="display: inline-block; vertical-align: middle; text-align: center;"> <div style="border: 1px solid black; border-radius: 50%; width: 40px; height: 40px; line-height: 40px; text-align: center; margin: 0 auto;">2</div> </div>	=	
--	---	---	---	--

<div style="border: 1px dashed black; padding: 10px; display: inline-block;">  </div> <div style="display: inline-block; vertical-align: middle; text-align: center;"> <div style="border: 1px solid black; border-radius: 50%; width: 40px; height: 40px; line-height: 40px; text-align: center; margin: 0 auto;">2</div> </div>	+	<div style="border: 1px dashed black; padding: 10px; display: inline-block;">  </div> <div style="display: inline-block; vertical-align: middle; text-align: center;"> <div style="border: 1px solid black; border-radius: 50%; width: 40px; height: 40px; line-height: 40px; text-align: center; margin: 0 auto;">2</div> </div>	=	
---	---	---	---	--