

Easy Number Line Word Problems

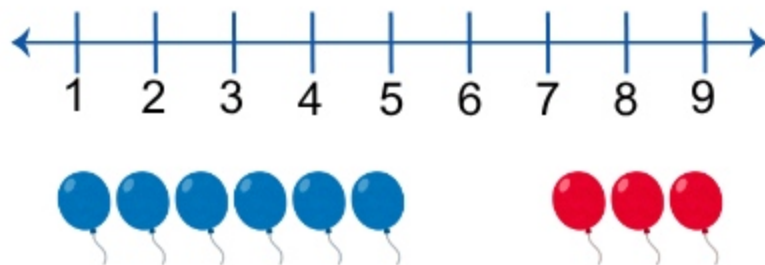
Solve each addition word problem and write your answer in the box.




Jack has 5 apples. She buys 3 more. How many apples does she have now?

$$\boxed{5} + \boxed{3} = \boxed{8}$$

Ben has 6 balloons. He gets 3 more. How many does he have now?



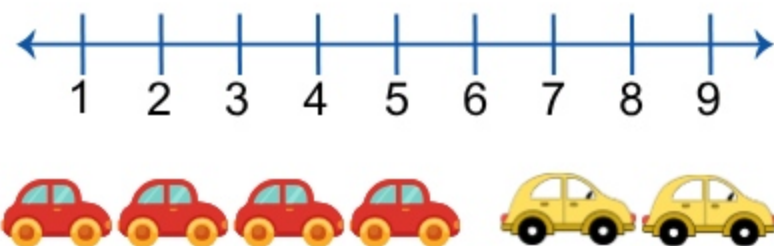
$$\boxed{} + \boxed{} = \boxed{}$$



Lily has 4 dolls. She gets 3 more as a gift. How many dolls does she have now?

$$\boxed{} + \boxed{} = \boxed{}$$

Tom counts 4 toy cars. His friend gives him 2 more. How many cars in total?



$$\boxed{} + \boxed{} = \boxed{}$$